

# Azaan International School

## Activity sheet VIII (2019-20)

Grade - II

Sec: \_\_\_\_\_

Subject- E.V.S

Name: \_\_\_\_\_

Date: \_\_\_\_\_

### LS. 20. Time, Direction and Space.

#### I. Fill in the blanks by choosing correct option.

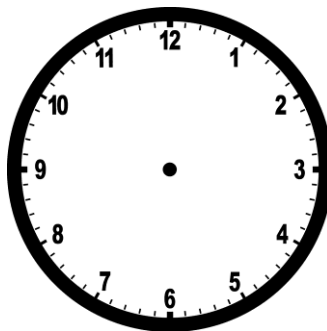
1. During the day, 12'o clock is known as \_\_\_\_\_ (noon/night)
2. There are \_\_\_\_\_ days in a week. (Four/seven)
3. There are \_\_\_\_\_ months in a year. (Six/twelve)
4. A \_\_\_\_\_ tells us about the year, month and day. (Calculator/calendar)
5. Sun rises in the \_\_\_\_\_. (North/east)

#### II. Write 'T' for True and 'F' for False statements.

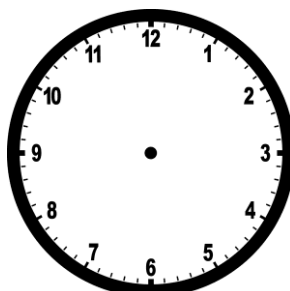
1. A clock tells us about time. [       ]
2. There are 366 days in a year. [       ]
3. North is on the top of the map. [       ]
4. Time is measured in seconds, minutes and hours. [       ]
5. The day before today is tomorrow. [       ]

#### III. Show the time by drawing the hands of the clock as when these given activities are done.

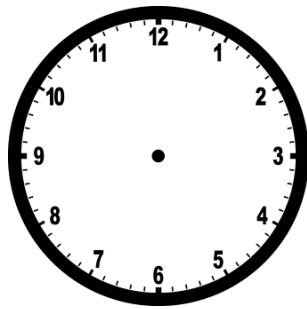
1. At what time, you wake up in the morning?



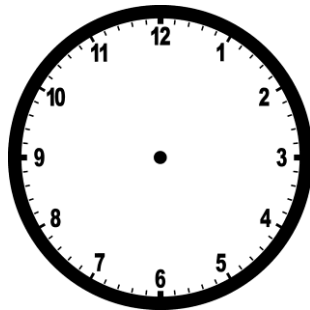
2. At what time you go to school?



3. At what time you play?



4. At what time you go to bed?



IV. Look at the picture and write the places of the given objects in it.



1. Where are the children playing?

---

2. Where is the boy sitting?

---

3. What is the girl doing in the picture?

---

4. Where is the slide in the picture?

---

5. Where is the ball in the picture?

---

# Azaan International School

## Activity sheet VII (2019-20)

Grade - II

Sec: \_\_\_\_\_

Subject- E.V.S

Name: \_\_\_\_\_

Date: \_\_\_\_\_

### Ls.18 The Earth And

### Ls.19 The world around me

#### I. Fill in the blanks by choosing correct option


1. The earth has air around it which is called the \_\_\_\_\_. (Environment/atmosphere)
2. A small model of the earth is called a \_\_\_\_\_ (globe/sphere)
3. An area of land that is higher than the land around it is called a \_\_\_\_\_. (Mountain/hill)
4. Each planet move around the sun in their fixed paths which are called \_\_\_\_\_(Orbits/planet)
5. Earth is also known as the \_\_\_\_\_(Jupiter/blue planet)
6. \_\_\_\_\_ is a colourful season of the year. (Winter/spring)
7. \_\_\_\_\_planet comes after mars. (Earth/Jupiter)

#### II. True /False.

1. A plain is also known as table land. [       ]
2. River water is salty water. [       ]
3. The camel is a useful animal in the desert. [       ]
4. The earth moves around the sun are called rotation. [       ]
5. Winter season is the hottest season of the year. [       ]

**III. Match the following with the correct symbols given below.**

**1. Mountain**



**2. Petrol pump**



**3. Letter box**



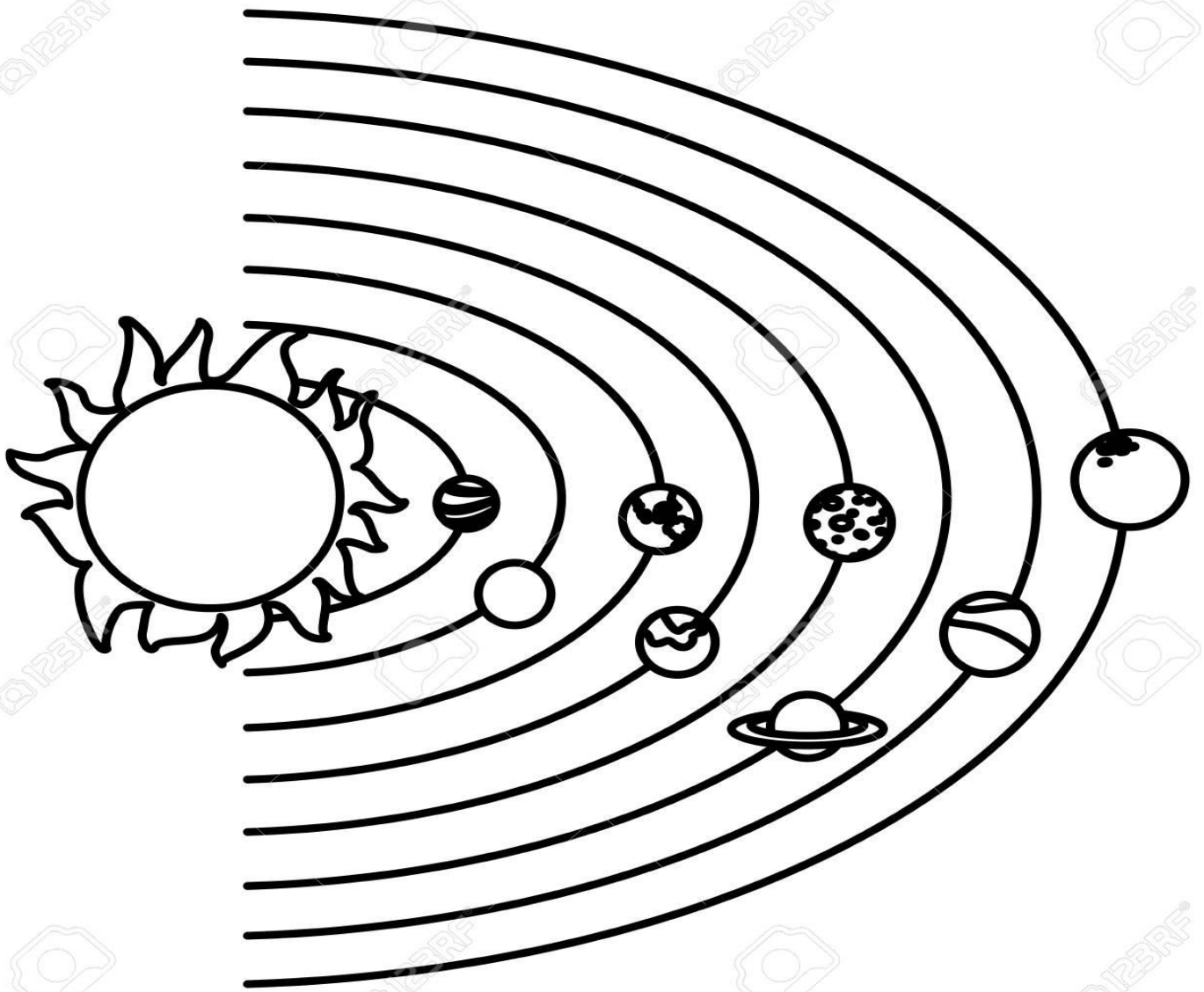
**4. Church**



**5. Parking**



IV. Write the names of planets shown in the picture below.



V. Identify the seasons given below and name them.



\_\_\_\_\_



# Azaan International School

## Activity sheet VII (2019-20)

Grade - II

Sec: \_\_\_\_\_

Subject- Math

Name: \_\_\_\_\_

Date: \_\_\_\_\_

### CHAPTER: 17. HANDLING DATA

#### I. Write tally marks for the following-

Numbers	Tally Marks
1	
2	
3	
4	
5	
6	
7	
8	
9	
10	

#### II. Represent the following numbers using tally marks.

a) 18 - \_\_\_\_\_.

b) 24 - \_\_\_\_\_.




c) 12 - \_\_\_\_\_.

d) 10 - \_\_\_\_\_.


e) 15 - \_\_\_\_\_.



III. Write name of each flower and draw as many tally marks as the number of letters in its name.

	Name	Tally Marks
		
		
		

IV. Given below are some fruits pictures. Count each fruit and complete the table given below.



Name of fruit	Tally Marks	Total
Apple		
Banana		
Grapes		
Pineapples		

- Which fruit is counted the most? \_\_\_\_\_
- Which fruit is counted as the least? \_\_\_\_\_
- How many more bananas are there than grapes? \_\_\_\_\_
- How many apples and pineapples are there together? \_\_\_\_\_.
- How many fruits are there in all? \_\_\_\_\_.

# Azaan International School

## Activity sheet VI (2019-20)

Grade - II

Sec: \_\_\_\_\_

Subject- English

Name: \_\_\_\_\_

Date: \_\_\_\_\_

### Chapter 13: Travelling To Assam

#### I. Arrange the words in alphabetical order.

a) chew      chair      chalk      chop.

\_\_\_\_\_

b) tap      talk      train      table.

\_\_\_\_\_

c) box      basket      balloon      bottle

\_\_\_\_\_

d) medal      mend      master      mesh.

\_\_\_\_\_

e) water      wind      waist      wish.

\_\_\_\_\_

#### II. Fill in the blanks with "am, is or are".

1. I \_\_\_\_\_ seven years old.

2. The students \_\_\_\_\_ very noisy.

3. Rita and Geeta \_\_\_\_\_ jogging in the park.

4. I \_\_\_\_\_ fine.

5. I \_\_\_\_\_ happy today.

6. Rose \_\_\_\_\_ beautiful.

7. A boy \_\_\_\_\_ tall.

**III. Rewrite the sentences in the correct order to form questions.**

1. coming picnic are who the for

A- \_\_\_\_\_

2. time what sleep you night did last

A- \_\_\_\_\_

3. eat want do you what to lunch for

A- \_\_\_\_\_

4 .finish work you will your when

A- \_\_\_\_\_

**IV. Fill in the blanks with the most suitable question words-**

1. \_\_\_\_\_ is Mumbai?

2. \_\_\_\_\_ is your birthday?

3. \_\_\_\_\_ are you doing?

4. \_\_\_\_\_ is shouting in the class?

5. \_\_\_\_\_ are you sad?